

Year 2 Autumn 2 Maths Activity Mat 6

Section 1

How many tens are in these numbers?



tens



tens



tens

Section 2

Draw the arrow after a half turn.



Section 3

Benny has 5 football cards.

Lee has 2 more.

How many cards does Lee have?

Section 4

Estimate which bag is heavier.



Section 5

Calculate:

ten subtract three =

nine add four =

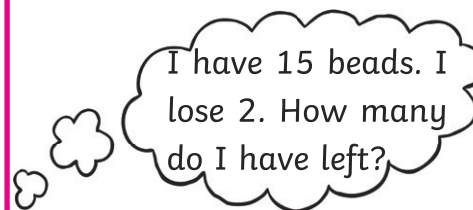
Section 6

How many ears are there altogether?



Section 7

Work this out in your head:



Section 8

I want to buy a sweet for 9p but these are the only coins I have in my purse. Draw the extra coin I need so I can buy the sweet.



Year 2 Autumn 2 Maths Activity Mat 6 **Answers**

Section 1

How many tens are in these numbers?



1 ten



4 tens



2 tens

Section 2

Draw the arrow after a half turn.



Section 3

Benny has 5 football cards.

Lee has 2 more.

How many cards does Lee have?

7 cards

Section 4

Estimate which bag is heavier.



B

Section 5

Calculate:

ten subtract three =

seven

nine add four =

seven

Section 6

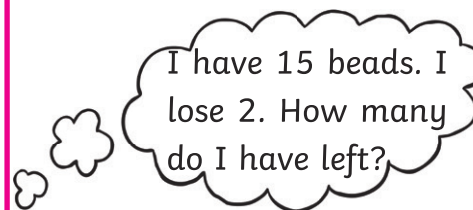
How many ears are there altogether?



8 ears

Section 7

Work this out in your head:



13

Section 8

I want to buy a sweet for 9p but these are the only coins I have in my purse. Draw the extra coin I need so I can buy the sweet.



2p coin

Year 2 Autumn 2 Maths Activity Mat 6

Section 1

How many tens are in these numbers?



Section 2

Draw the arrow after a quarter turn.



Section 3

Samir has 23 football cards.

Ali has 13 more.

How many cards does Ali have?

Section 4

Estimate which bag is heavier.



Section 5

Calculate:

twenty-five subtract six =

thirty add eleven =

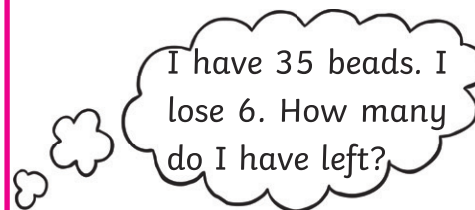
Section 6

How many paws are there altogether?



Section 7

Work this out in your head:



Section 8

I want to buy a toy for 48p but these are the only coins I have in my purse. Draw the extra coins I need so I can buy the toy.



Year 2 Autumn 2 Maths Activity Mat 6 **Answers**

Section 1

How many tens are in these numbers?



3 tens



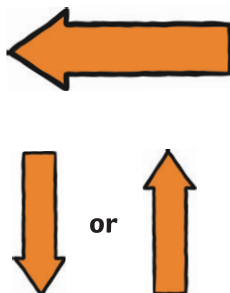
5 tens



8 tens

Section 2

Draw the arrow after a quarter turn.



Section 3

Samir has 23 football cards.

Ali has 13 more.

How many cards does Ali have?

36 cards

Section 4

Estimate which bag is heavier.



A

Section 5

Calculate:

twenty-five subtract six =

nineteen

thirty add eleven =

forty-one

Section 6

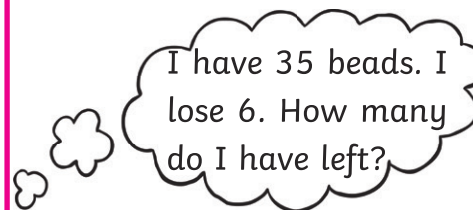
How many paws are there altogether?



16 paws

Section 7

Work this out in your head:



29

Section 8

I want to buy a toy for 48p but these are the only coins I have in my purse. Draw the extra coins I need so I can buy the toy.

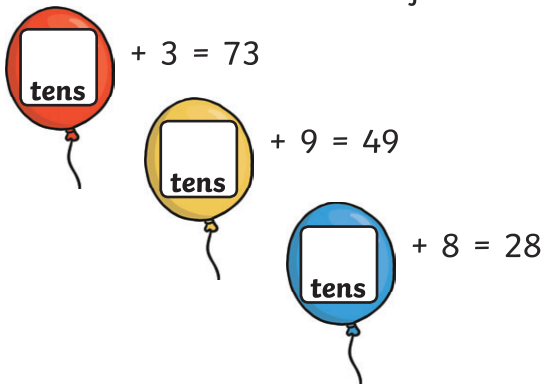


2p and 1p

Year 2 Autumn 2 Maths Activity Mat 6

Section 1

Write a number on the balloons with the correct number of tens.



Section 2

Draw the arrow after 2 quarter turns in the same direction.



Section 3

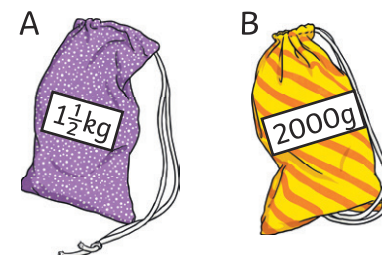
Yang has 28 football cards.

Usman has half that amount.

How many cards does Usman have?

Section 4

Estimate which bag is heavier.



Section 5

Calculate:

one hundred and six add ten =

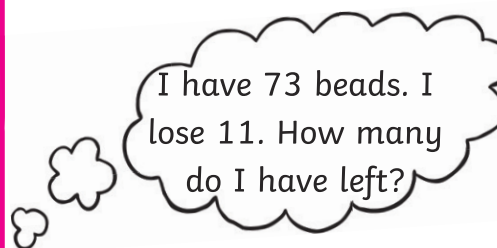
one hundred and twelve subtract four =

Section 6

If there were 4 cats and 2 hens, how many feet would there be altogether? Show your working out.

Section 7

Work this out in your head:



Section 8

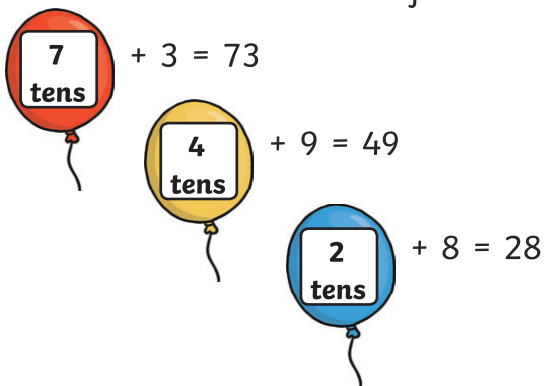
I want to buy a toy for £1.90 but these are the only coins I have in my purse. Draw the extra coins I need so I can buy the toy.



Year 2 Autumn 2 Maths Activity Mat 6 **Answers**

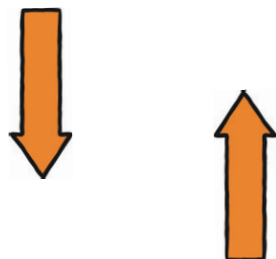
Section 1

Write a number on the balloons with the correct number of tens.



Section 2

Draw the arrow after 2 quarter turns in the same direction.



Section 3

Yang has 28 football cards.

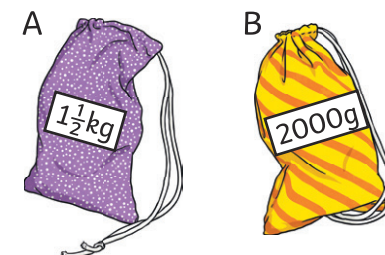
Usman has half that amount.

How many cards does Usman have?

14 cards

Section 4

Estimate which bag is heavier.



B

Section 5

Calculate:

one hundred and six add ten =

one hundred and sixteen

one hundred and twelve subtract four =

one hundred and eight

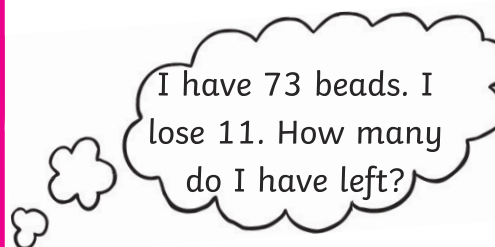
Section 6

If there were 4 cats and 2 hens, how many feet would there be altogether? Show your working out.

20 feet

Section 7

Work this out in your head:



62

Section 8

I want to buy a toy for £1.90 but these are the only coins I have in my purse. Draw the extra coins I need so I can buy the toy.



5p and 10p